

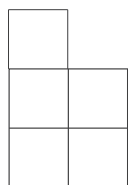


Όνομα : _____

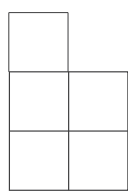
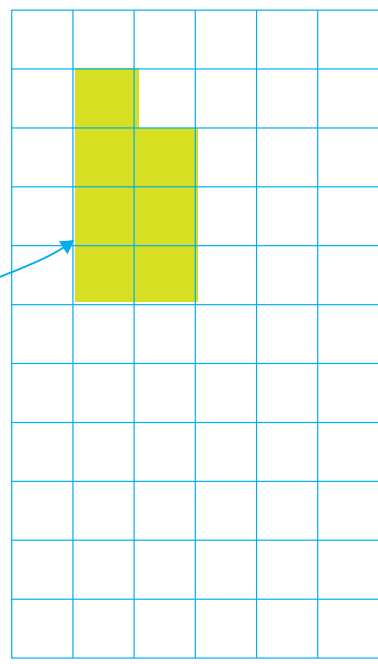
8.10 Πρόσθεση με επιφάνειες 1-10




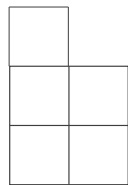

- Πόσα τετραγωνάκια είναι όλα μαζί;
Πρόσθεσε και χρωμάτισε στο πλέγμα.



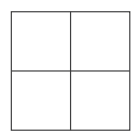
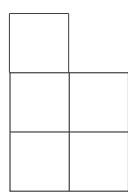
$$\underline{5} + \underline{2} = \underline{7}$$



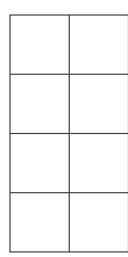
$$\underline{\quad} + \underline{\quad} = \underline{\quad}$$



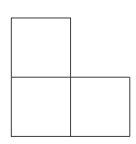
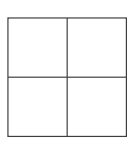

$$\underline{\quad} + \underline{\quad} = \underline{\quad}$$



$$\underline{\quad} + \underline{\quad} = \underline{\quad}$$




$$\underline{\quad} + \underline{\quad} = \underline{\quad}$$




$$\underline{\quad} + \underline{\quad} = \underline{\quad}$$





- Πόσα τετραγωνάκια είναι όλα μαζί;
Πρόσθεσε και χρωμάτισε στο πλέγμα.



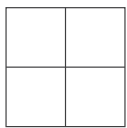
$$\underline{3} + \underline{1} = \underline{4}$$



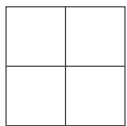
$$\underline{\quad} + \underline{\quad} = \underline{\quad}$$



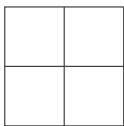
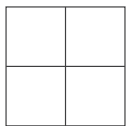
$$\underline{\quad} + \underline{\quad} = \underline{\quad}$$



$$\underline{\quad} + \underline{\quad} = \underline{\quad}$$



$$\underline{\quad} + \underline{\quad} = \underline{\quad}$$



$$\underline{\quad} + \underline{\quad} = \underline{\quad}$$

