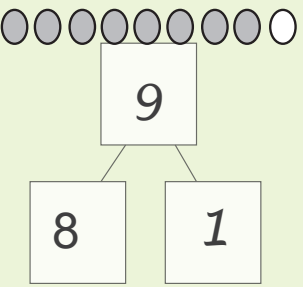


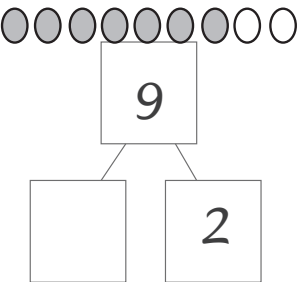
7.4 Προσθέσεις με αριθμούς 1 - 9

$\underline{9} = \underline{8} + \underline{1}$

 $\underline{8} + \underline{1} = \underline{9}$

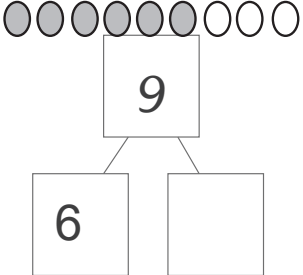
$\underline{8} + \underline{1} = \underline{9}$



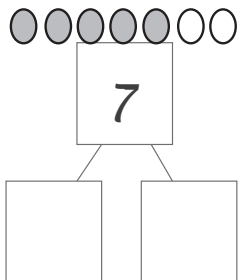
Συμπλήρωσε τους φίλους αριθμούς και τις πράξεις.

$\underline{9} = \underline{\quad} + \underline{\quad}$

 $\underline{\quad} + \underline{\quad} = \underline{9}$

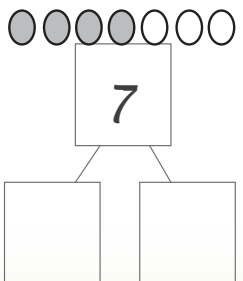
$\underline{\quad} + \underline{\quad} = \underline{9}$

$\underline{9} = \underline{\quad} + \underline{\quad}$

 $\underline{\quad} + \underline{\quad} = \underline{9}$

$\underline{\quad} + \underline{\quad} = \underline{9}$

$\underline{7} = \underline{\quad} + \underline{\quad}$

 $\underline{\quad} + \underline{\quad} = \underline{7}$

$\underline{\quad} + \underline{\quad} = \underline{7}$

$\underline{7} = \underline{\quad} + \underline{\quad}$

 $\underline{\quad} + \underline{\quad} = \underline{7}$

$\underline{\quad} + \underline{\quad} = \underline{7}$



Λογάριασε τις προσθέσεις.

