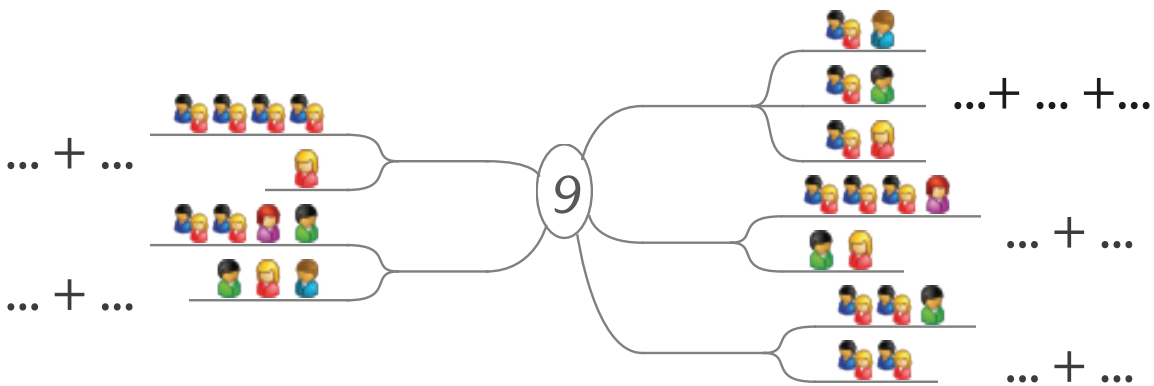


7.2 Εννιά (9)

α' Συμπλήρωσε τους αριθμούς που έχουν άθροισμα 9.



β' Ζωγράφισε κουκκίδες, έτσι ώστε να δίνουν άθροισμα 9.

$$9 = \begin{array}{|c|} \hline \bullet \bullet \\ \bullet \bullet \\ \hline \end{array} \begin{array}{|c|} \hline \bullet \bullet \\ \bullet \bullet \\ \hline \end{array}$$

$$9 = \begin{array}{|c|} \hline \\ \hline \end{array} \begin{array}{|c|} \hline \\ \hline \end{array} \begin{array}{|c|} \hline \\ \hline \end{array}$$











































































$$9 = \begin{array}{|c|} \hline \\ \hline \end{array} \begin{array}{|c|} \hline \\ \hline \end{array} \begin{array}{|c|} \hline \\ \hline \end{array} \begin{array}{|c|} \hline \\ \hline \end{array}$$

$$9 = \begin{array}{|c|} \hline \\ \hline \end{array} \begin{array}{|c|} \hline \\ \hline \end{array} \begin{array}{|c|} \hline \\ \hline \end{array} \begin{array}{|c|} \hline \\ \hline \end{array} \begin{array}{|c|} \hline \\ \hline \end{array}$$

$$9 = \begin{array}{|c|} \hline \\ \hline \end{array} \begin{array}{|c|} \hline \\ \hline \end{array} \begin{array}{|c|} \hline \\ \hline \end{array} \begin{array}{|c|} \hline \\ \hline \end{array} \begin{array}{|c|} \hline \\ \hline \end{array} \begin{array}{|c|} \hline \\ \hline \end{array}$$



Χρωμάτισε με δύο χρώματα τις μπάλες κάθε σειράς, έτσι που καμία σειρά να μην είναι ίδια με άλλη.

										
									1	8
										
										
										
										
										
										

Γράψε φίλους αριθμούς του 9.

