









## 6.6 Αφαίρεση με μηδέν (0)

Υπολόγισε τις αφαιρέσεις.

ΕΧΕΙΣ	ΔΙΝΕΙΣ	ΜΕΝΟΥΝ
	1	1
	0	3
	3	
	1	
	5	
	0	
	0	
	4	
4	2	
1	0	
2	2	

Στη γλώσσα των μαθηματικών



$$\underline{2} - \underline{1} = \underline{1}$$

$$\underline{\quad} - \underline{\quad} = \underline{\quad}$$

$$\underline{\quad} - \underline{\quad} = \underline{\quad}$$

$$\underline{\quad} - \underline{\quad} = \underline{\quad}$$

$$\underline{\quad} - \underline{\quad} = \underline{\quad}$$

$$\underline{\quad} - \underline{\quad} = \underline{\quad}$$

$$\underline{\quad} - \underline{\quad} = \underline{\quad}$$

$$\underline{\quad} - \underline{\quad} = \underline{\quad}$$

$$\underline{\quad} - \underline{\quad} = \underline{\quad}$$

$$\underline{\quad} - \underline{\quad} = \underline{\quad}$$

$$\underline{\quad} - \underline{\quad} = \underline{\quad}$$

- Πόσα καρότα έφαγε το κουνελάκι;

$3 - 2 = 1$

$4 - \underline{\quad} = 2$

$5 - \underline{\quad} = 1$

$\underline{\quad} - \underline{\quad} = \underline{\quad}$

$\underline{\quad} - \underline{\quad} = \underline{\quad}$

$\underline{\quad} - \underline{\quad} = \underline{\quad}$

$\underline{\quad} - \underline{\quad} = \underline{\quad}$

$\underline{\quad} - \underline{\quad} = \underline{\quad}$