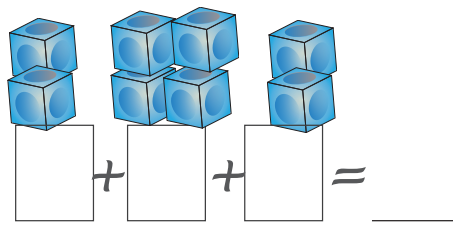
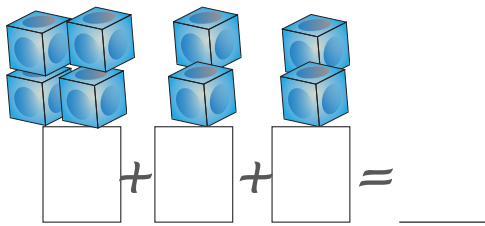
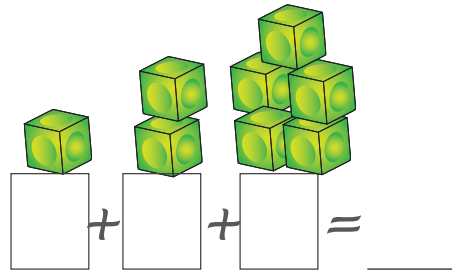
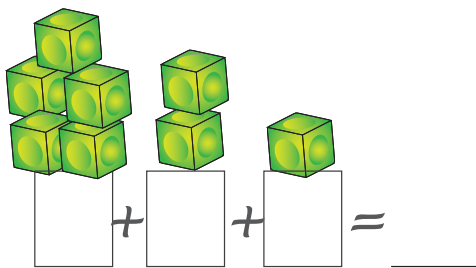
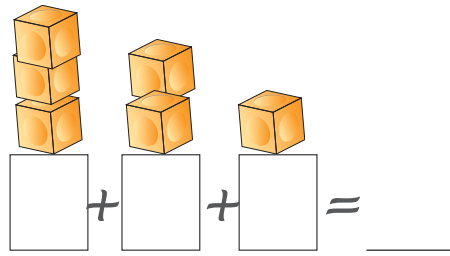
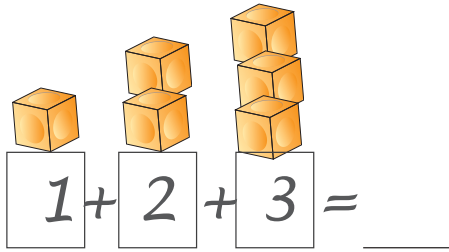


6.5 Πρόσθεση με τρεις προσθετέους



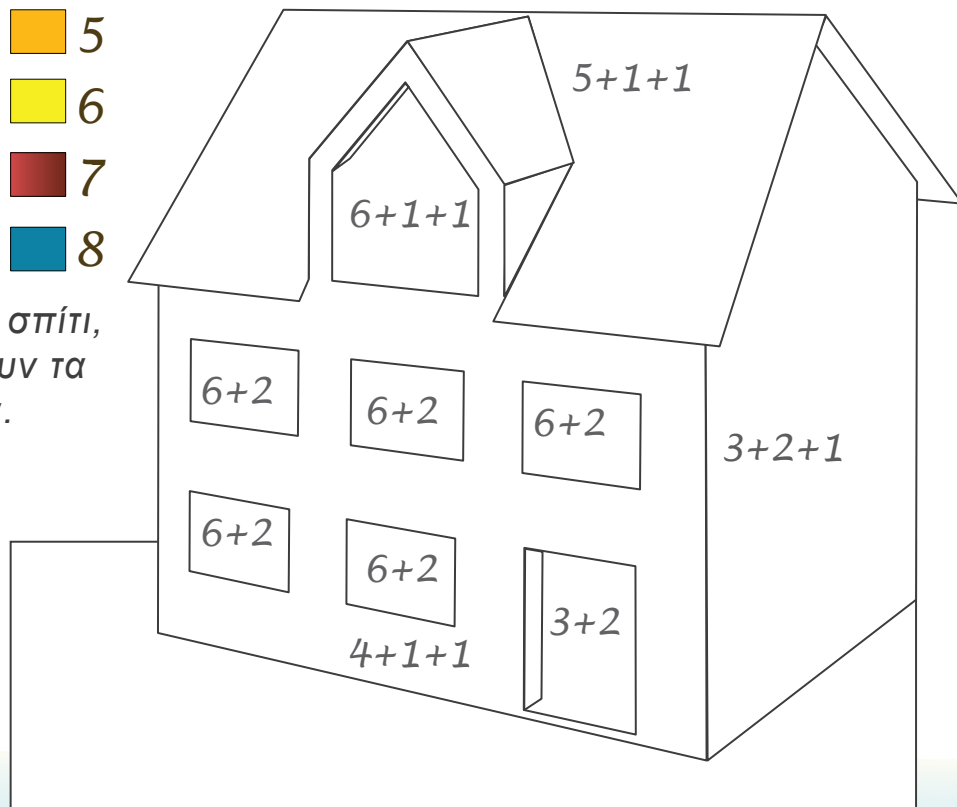
- Πόσα είναι τα κυβάκια;



- 5
- 6
- 7
- 8



Χρωμάτισε το σπίτι,
όπως δείχνουν τα
χρώματα.





Πρόσθεσε, όπως στο παράδειγμα.

$3 + 1 + 1 = 5$

○ ○ ○	○	○
-------	---	---

$3 + 2 + 1 = \underline{\quad}$

--	--	--

$3 + 2 + 2 = \underline{\quad}$

--	--	--

$4 + 2 + 1 = \underline{\quad}$

--	--	--

$4 + 2 + 2 = \underline{\quad}$

--	--	--

$5 + 1 + 1 = \underline{\quad}$

--	--	--

$5 + 2 + 1 = \underline{\quad}$

--	--	--

$6 + 1 + 1 = \underline{\quad}$

--	--	--



Αύξησε με +1, ή μείωσε με -1 τους αριθμούς.

+1	
1	2
2	
3	
4	
5	
6	

-1	
8	7
7	
6	
5	
4	
3	