



5.4 Αφαίρεση μέχρι το πέντε

Όνομα : _____

Πόσες μπανάνες μένουν για εμάς;



___ - ___ = ___



___ - ___ = ___



___ - ___ = ___



___ - ___ = ___



___ - ___ = ___



___ - ___ = ___



___ - ___ = ___



___ - ___ = ___



___ - ___ = ___




___ - ___ = ___




- Πόσα ρέστα πρέπει να δώσει;

___ - ___ = ___


~~Σβήσε~~ κεριά και συμπλήρωσε τις αφαιρέσεις.




$$\underline{\quad} - \underline{\quad} = \underline{\quad}$$




$$\underline{\quad} - \underline{\quad} = \underline{\quad}$$




$$\underline{\quad} - \underline{\quad} = \underline{\quad}$$




$$\underline{\quad} - \underline{\quad} = \underline{\quad}$$




$$\underline{\quad} - \underline{\quad} = \underline{\quad}$$




$$\underline{\quad} - \underline{\quad} = \underline{\quad}$$




$$\underline{\quad} - \underline{\quad} = \underline{\quad}$$



$$\underline{\quad} - \underline{\quad} = \underline{\quad}$$



$$\underline{\quad} - \underline{\quad} = \underline{\quad}$$



$$\underline{\quad} - \underline{\quad} = \underline{\quad}$$