



5.3 Πρόσθεση 0 - 5


+


ΣΥΝ


- Πόσα περιστέρια είναι όλα μαζί; Συμπλήρωσε τις προσθέσεις.





$$\underline{2} + \underline{1} = \underline{3}$$



$$\underline{1} + \underline{\quad} = \underline{\quad}$$


$$\underline{\quad} + \underline{\quad} = \underline{\quad}$$


$$\underline{\quad} + \underline{\quad} = \underline{\quad}$$


$$\underline{\quad} + \underline{\quad} = \underline{\quad}$$


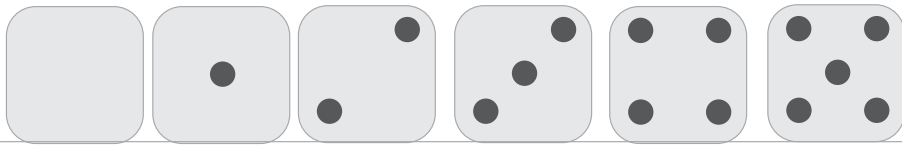
$$\underline{\quad} + \underline{\quad} = \underline{\quad}$$


$$\underline{\quad} + \underline{\quad} = \underline{\quad}$$


$$\underline{\quad} + \underline{\quad} = \underline{\quad}$$

Ζωγράφισε μία δική σου πρόσθεση.

$$\underline{\quad} + \underline{\quad} = \underline{\quad}$$



Συμπλήρωσε τις προσθέσεις.




$$+ \quad =$$



$$+ \quad =$$



$$+ \quad =$$



$$+ \quad =$$




$$+ \quad =$$



$$+ \quad =$$



$$+ \quad =$$



$$+ \quad =$$